


हमारा विश्वास... हर एक विद्यार्थी है खास

JEE  
MAIN  
JAN'19

**QUESTION WITH SOLUTION**  
DATE : 11-01-2019 \_ EVENING



**20000+**  
SELECTIONS SINCE 2007

JEE (Advanced)

**4626**

(Under 50000 Rank)

JEE (Main)

**13953**

NEET / AIIMS NTSE / OLYMPIADS

**662**

(since 2016)

**1066**

(5th to 10th class)

Toll Free :  
1800-212-1799

**MOTION™**

Nurturing potential through education

H.O. : 394, Rajeev Gandhi Nagar, Kota  
www.motion.ac.in | ✉: info@motion.ac.in

# [MATHEMATICS] 11-01-2019\_Evening

1. If  $\begin{vmatrix} a-b-c & 2a & 2a \\ 2b & b-c-a & 2b \\ 2c & 2c & c-a-b \end{vmatrix} = (a+b+c)(x+a+b+c)^2$ ,  $x \neq 0$  and  $a+b+c \neq 0$ , then  $x$  is

equal to :

- (A)  $2(a+b+c)$       (B)  $-(a+b+c)$       (C)  $abc$       (D)  $-2(a+b+c)$

Sol. **D**

$$\begin{vmatrix} a-b-c & 2a & 2a \\ 2b & b-c-a & 2b \\ 2c & 2c & c-a-b \end{vmatrix}$$

$$R_1 \rightarrow R_1 + R_2 + R_3$$

$$(a+b+c) \begin{vmatrix} 1 & 1 & 1 \\ 2b & b-c-a & 2b \\ 2c & 2c & c-a-b \end{vmatrix}$$

$$(a+b+c) \begin{vmatrix} 1 & 0 & 0 \\ 2b & -b-c-a & 0 \\ 2c & 0 & -a-b-c \end{vmatrix}$$

$$(a+b+c)^3 \begin{vmatrix} 1 & 0 & 0 \\ 2b & -1 & 0 \\ 2c & 0 & -1 \end{vmatrix}$$

Now

$$(a+b+c)(a+b+c)^2 = (a+b+c)(x+a+b+c)^2$$

$$x = 0, -2(a+b+c)$$

2. Let  $K$  be the set of all real values of  $x$  where the function  $f(x) = \sin |x| - |x| + 2(x - \pi) \cos |x|$  is not differentiable. Then the set  $K$  is equal to :

- (A)  $\phi$  (an empty set)      (B)  $\{\pi\}$       (C)  $\{0\}$       (D)  $\{0, \pi\}$

Sol. **A**

$$f(x) = \sin |x| - |x| + 2(x - \pi) \cos |x|$$

$$f(x) = \begin{cases} \sin x - x + 2(x - \pi) \cos x ; & x \geq 0 \\ -\sin x + x + 2(x - \pi) \cos x ; & x < 0 \end{cases}$$

$$f'(x) = \begin{cases} \cos x - 1 + 2 \cos x - 2 \sin x(x - \pi) ; & x \geq 0 \\ -\cos x + 1 + 2 \cos x - 2 \sin x(x - \pi) ; & x < 0 \end{cases}$$

$$f'(0^+) = 2$$

$$f'(0^-) = 2$$

$$f'(\pi) = -4$$

$$\Rightarrow (K \neq \phi)$$

3. Let a function  $f : (0, \infty) \rightarrow (0, \infty)$  be defined by  $f(x) = \left|1 - \frac{1}{x}\right|$ . Then  $f$  is :-

- (A) Injective only      (B) Not injective but it is surjective  
(C) Both injective as well as surjective      (D) Neither injective nor surjective

Sol. **D**

$$f : (0, \infty) \rightarrow (0, \infty)$$

$$f(x) = \left| 1 - \frac{1}{x} \right|$$

$$f(x) = \left| \frac{x-1}{x} \right|$$

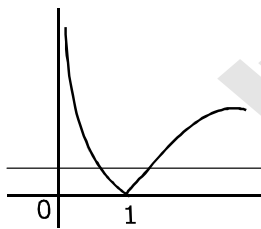
$$\frac{x-1}{x} ; x < 0$$

$$\frac{-(x-1)}{x} ; 0 < x \leq 1$$

$$\frac{(x-1)}{x} ; x > 1$$

$$f(x) = \begin{cases} \frac{1-x}{x} ; 0 < x \leq 1 \\ \frac{x-1}{x} ; x > 1 \end{cases}$$

$$f(x) = \begin{cases} -\frac{1}{x^2} ; 0 < x \leq 1 \rightarrow \text{decreasing} \\ \frac{1}{x^2} ; x > 1 \rightarrow \text{increasing} \end{cases}$$



(Neither injective Nor surjective )

4. Let A and B be two invertible matrices of order  $3 \times 3$ . If  $\det(ABA^T) = 8$  and  $\det(AB^{-1}) = 8$ , then  $\det(BA^{-1}B^T)$  is equal to :

(A) 16

(B) 1

(C)  $\frac{1}{16}$

(D)  $\frac{1}{4}$

**Sol. C**

$$|ABA^T| = 8 \Rightarrow |A|^2 |B| = 8$$

$$|AB^{-1}| = 8 \Rightarrow \frac{|A|}{|B|} = 8$$

$$\text{Now, } \det(BA^{-1}B^T) = \frac{|B|^2}{|A|} =$$

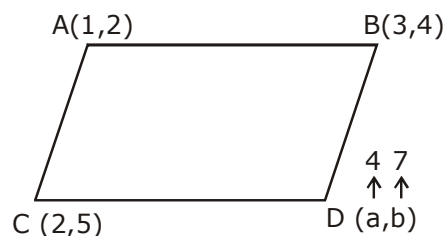
$$|A|^3 = 64 \Rightarrow |A| = 4 \text{ \& } |B| = \frac{1}{2}$$

$$\Rightarrow \frac{|B|^2}{|A|} = \frac{1}{16}$$

5. If in a parallelogram ABDC, the coordinates of A, B and C are respectively (1, 2), (3, 4) and (2, 5) then the equation of the diagonal AD is :

- (A)  $3x + 5y - 13 = 0$  (B)  $3x - 5y + 7 = 0$   
 (C)  $5x + 3y - 11 = 0$  (D)  $5x - 3y + 1 = 0$

Sol. D



$$a + 1 = 5 \quad \& \quad b + 2 = 9$$

$$a = 4 \quad \quad \quad b = 7$$

eq. of AD is :

$$y - 2 = (x - 1) \times \frac{5}{3}$$

$$3y - 6 = 5x - 5$$

$$5x - 3y + 1 = 0$$

6. The solution of the differential equation,  $\frac{dy}{dx} = (x - y)^2$ , when  $y(1) = 1$ , is :

- (A)  $\log_e \left| \frac{2-x}{2-y} \right| = x - y$  (B)  $-\log_e \left| \frac{1-x+y}{1+x-y} \right| = 2(x - 1)$   
 (C)  $-\log_e \left| \frac{1+x-y}{1-x+y} \right| = x + y - 2$  (D)  $\log_e \left| \frac{2-y}{2-x} \right| = 2(y - 1)$

Sol. B

$$\frac{dy}{dx} = (x - y)^2$$

$$x - y = t$$

$$1 - \frac{dy}{dx} = \frac{dt}{dx}$$

$$1 - \frac{dt}{dx} = t^2 \Rightarrow \frac{dt}{dx} = 1 - t^2$$

$$\int \frac{dt}{1-t^2} = \int dx$$

$$-\frac{1}{2} \ln \left( \frac{1-t}{1+t} \right) = x + c$$

$$-\frac{1}{2} \ln \left( \frac{1-x+y}{1+x-y} \right) = x + c$$

$$x = 1, \quad y = 1$$

$$\ln(1) = 2 + c + c \Rightarrow c = -2$$

7. If  $\int \frac{x+1}{\sqrt{2x-1}} dx = f(x)\sqrt{2x-1} + C$ , where C is a constant of integration, then f(x) is equal to:

- (A)  $\frac{2}{3}(x-4)$       (B)  $\frac{1}{3}(x+1)$       (C)  $\frac{1}{3}(x+4)$       (D)  $\frac{2}{3}(x+2)$

Sol. C

$$\int \frac{x+1}{\sqrt{2x-1}} dx = f(x)\sqrt{2x-1} + c$$

$$\int \frac{xdx}{\sqrt{2x-1}} + \int \frac{dx}{(2x-1)^{1/2}}$$

$$\frac{1}{2} \int \frac{(2x+1-1)}{\sqrt{2x-1}} dx + \int \frac{dx}{(2x-1)^{1/2}}$$

$$\frac{1}{2} \left[ \int \sqrt{2x-1} dx + \int \frac{dx}{(2x-1)^{1/2}} \right] + \int \frac{dx}{(2t-1)^{1/2}}$$

$$\frac{1}{2} \left[ \frac{2}{3} \frac{(2x-1)^{3/2}}{2} \right] + \frac{3}{2} \times 2 \frac{(2x-1)^{1/2}}{2} + C$$

$$\sqrt{(2x-1)} \left\{ \frac{1}{6} \times (2x-1) + \frac{3}{2} \right\} + C$$

$$\sqrt{2x-1} \left\{ \frac{x+4}{3} \right\} + C$$

8. If 19th term of a non-zero A.P. is zero, then its (49th term) : (29th term) is:

- (A) 3 : 1      (B) 2 : 1      (C) 1 : 3      (D) 4 : 1

Sol. A

$$T_{19} = 0 \Rightarrow a + 18d = 0$$

$$\frac{T_{49}}{T_{29}} = \frac{a+48d}{a+28d} \Rightarrow \frac{(48-18)d}{(28-18)d}$$

$$= \frac{30}{10} = \frac{3}{1}$$

9. Contrapositive of the statement " If two numbers are not equal, then their squares are not equal." Is:-

- (A) If the squares of two numbers are equal, then the numebrs are equal.  
 (B) If the squares of two numbers are equal, then the numebrs are not equal.  
 (C) If the squares of two numbers are not equal, then the numebrs are equal.  
 (D) If the squares of two numbers are not equal, then the numebrs are not equal.

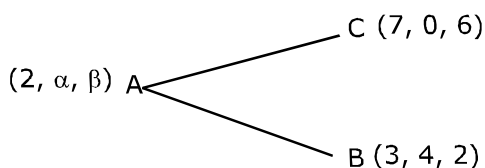
Sol. A

Contrapositive of  $p \rightarrow q$  is  $\sim q \rightarrow \sim p$

10. If the point  $(2, \alpha, \beta)$  lies on the plane which passes through the points  $(3, 4, 2)$  and  $(7, 0, 6)$  and is perpendicular to the plane  $2x - 5y = 15$ , then  $2\alpha - 3\beta$  is equal to:

- (A) 5      (B) 7  
 (C) 17      (D) 12

Sol. B



$$\vec{n} = \vec{AB} \times \vec{AC} = (\alpha + \beta - 6)\hat{i} + (\beta - 1)\hat{j} + (5 - \alpha)\hat{k}$$

Now,

$$2(\alpha + \beta - 6) - 5(\beta - 1) = 0$$

$$2\alpha - 3\beta = 7$$

- 11.** Let  $(x + 10)^{50} + (x - 10)^{50} = a_0 + a_1x + a_2x^2 + \dots + a_{50}x^{50}$ , for all  $x \in \mathbb{R}$ ; then  $\frac{a_2}{a_0}$  is equal to :
- (A) 12.75                      (B) 12.00                      (C) 12.50                      (D) 12.25

**Sol. D**

$$(10 + x)^{50} = {}^{50}C_0(10)^{50} + {}^{50}C_1(10)^{49}x + \dots + {}^{50}C_{50}x^{50}$$

$$(10 - x)^{50} = {}^{50}C_0(10)^{50} - {}^{50}C_1(10)^{49}x + \dots + {}^{50}C_{50}x^{50}$$

$$(10 + x)^{50} + (10 - x)^{50} = 2[{}^{50}C_0(10)^{50} + {}^{50}C_2(10)^{48}x^2 + \dots]$$

$$\Rightarrow \frac{a_2}{a_0} = \frac{{}^{50}C_2 \times 10^{98}}{10^{56}} = \frac{{}^{50}C_2}{10^2}$$

$$= 12.25$$

- 12.** A circle cuts a chord of length  $4a$  on the  $x$ -axis and passes through a point on the  $y$ -axis, distant  $2b$  from the origin. Then the locus of the centre of this circle, is:
- (A) an ellipse                      (B) a parabola                      (C) a straight line                      (D) a hyperbola

**Sol. B**

Let eq. of circle in :  
 $x^2 + y^2 + 2gx + 2fy + C = 0$   
 given  $x$  - intercept =  $4a$

$$2\sqrt{g^2 - C} = 4a$$

$$g^2 - C = 4a^2$$

$$c = g^2 - 4a^2 \quad \dots (1)$$

also, if passed through  $(0, 2b)$

$$4b^2 + 4fb + c = 0$$

from (1)

$$4b^2 + 4fb + g^2 - 4a^2 = 0$$

$$x^2 - 4by + 4b^2 - 4a^2 = 0$$

parabola

- 13.** If the area of the triangle whose one vertex is at the vertex of the parabola,  $y^2 + 4(x - a^2) = 0$  and the other two vertices are the points of intersection of the parabola and  $y$ -axis, is 250 sq. units then a value of 'a' is :
- (A)  $5\sqrt{5}$                       (B) 5                      (C)  $(10)^{2/3}$                       (D)  $5(2^{1/3})$

**Sol. B**

$$y^2 + 4(x - a^2) = 0$$

$$v(a^2, 0)$$

at  $y$  - axis,  $x = 0$

$$\Rightarrow y^2 = 4a^2 \Rightarrow y = \pm 2a$$

$$\text{So, } \frac{1}{2} \begin{vmatrix} a^2 & 0 & 1 \\ 0 & 2a & 1 \\ 0 & -2a & 1 \end{vmatrix} = \pm 250$$

$$a^2 (4a) = \pm 500$$

$$a^3 = \pm 125$$

$$a = 5 \text{ or } -5$$

14. The area (in sq. units) in the first quadrant bounded by the parabola,  $y = x^2 + 1$ , the tangent to it at the point  $(2, 5)$  and the coordinate axes is :

(A)  $\frac{187}{24}$                       (B)  $\frac{8}{3}$                       (C)  $\frac{37}{24}$                       (D)  $\frac{14}{3}$

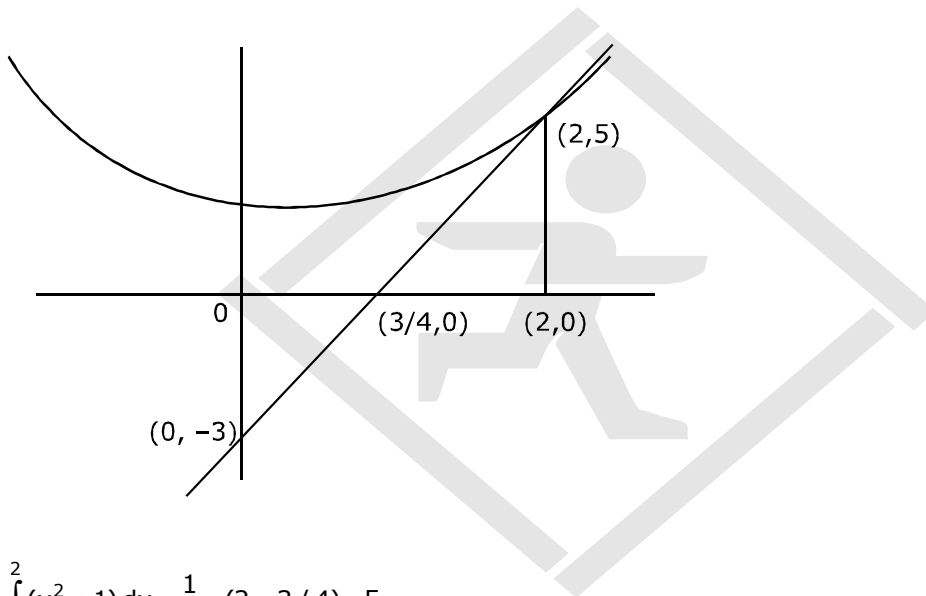
Sol. C

$$x^2 = y - 1$$

$$T = 0$$

$$2 \times 2x = y + 5 - 2$$

$$4x = y + 3$$



$$\int_0^2 (x^2 + 1) dx - \frac{1}{2} \times (2 - 3/4) \times 5$$

$$\left( \frac{x^3}{3} + x \right)_0^2 - \frac{25}{8}$$

$$\frac{8}{3} + 2 - \frac{25}{8} \Rightarrow \frac{14}{3} - \frac{25}{8} \Rightarrow \frac{112 - 75}{24} \Rightarrow \frac{37}{24}$$

15. All  $x$  satisfying the inequality  $(\cot^{-1}x)^2 - 7(\cot^{-1}x) + 10 > 0$ , lie in the interval :

(A)  $(-\infty, \cot 5) \cup (\cot 4, \cot 2)$                       (B)  $(\cot 5, \cot 4)$   
 (C)  $(-\infty, \cot 5) \cup (\cot 2, \infty)$                       (D)  $(\cot 2, \infty)$

Sol. D

$$t^2 - 7t + 10 > 0$$

$$t < 2 \text{ or } t > 5$$

$$\cot^{-1}x < 2 \text{ or } x > \cot 2$$

$$x \in (\cot 2, \infty)$$

16. Let  $f(x) = \frac{x}{\sqrt{a^2 + x^2}} - \frac{d-x}{\sqrt{b^2 + (d-x)^2}}$ ,  $x \in \mathbb{R}$  where  $a, b$  and  $d$  are non-zero real constants. Then:

- (A)  $f$  is neither increasing nor decreasing function of  $x$
- (B)  $f$  is a decreasing function of  $x$
- (C)  $f'$  is not a continuous function of  $x$
- (D)  $f$  is an increasing function of  $x$

Sol. **B**

$$f'(x) = \frac{\sqrt{a^2 + x^2} - \frac{x^2}{\sqrt{a^2 + x^2}}}{(a^2 + x^2)}$$

$$- \frac{\sqrt{b^2 + (d-x)^2} - (d-x) \left[ \frac{-2(d-x)}{2\sqrt{b^2 + (d-x)^2}} \right]}{b^2 + (d-x)^2}$$

$$f'(x) = \frac{\sqrt{a^2 + x^2} - \frac{x^2}{\sqrt{a^2 + x^2}}}{(a^2 + x^2)} + \frac{-(b^2 + (d-x)^2) + (d-x)^2}{[b^2 + (d-x)^2]^{3/2}}$$

$$\Rightarrow \frac{a^2}{(a^2 + x^2)^{3/2}} + \left\{ \frac{b^2}{[b^2 + (d-x)^2]^{3/2}} \right\}$$

$> 0 \Rightarrow$  Increasing function

17. Let  $S_n = 1 + q + q^2 + \dots + q^n$  and  $T_n = 1 + \left(\frac{q+1}{2}\right) + \left(\frac{q+1}{2}\right)^2 + \dots + \left(\frac{q+1}{2}\right)^n$  where  $q$  is a real number

and  $q \neq 1$ . If  ${}^{101}C_1 + {}^{101}C_2 \cdot S_1 + \dots + {}^{101}C_{101} \cdot S_{100} = \alpha T_{100}$  then  $\alpha$  is equal to:

- (A) 200
- (B)  $2^{100}$
- (C)  $2^{99}$
- (D) 202

Sol. **B**

$$S_n = 1 + q + q^2 + \dots + q^n = \frac{q^{n+1} - 1}{q - 1}$$

$$T_n = \frac{\left(\frac{q+1}{2}\right)^{n+1} - 1}{\frac{q+1}{2} - 1} \Rightarrow \frac{(q+1)^{n+1} - 2^{n+1}}{(q-1) \times 2^n}$$

Let

$$S = {}^{101}C_1 + {}^{101}C_2 S_1 + \dots + {}^{101}C_{101} S_{100}$$

$$S = \sum_{r=0}^{100} {}^{101}C_{r+1} S_r$$

$$= \sum_{r=0}^{100} {}^{101}C_{r+1} \times \left( \frac{q^{r+1} - 1}{q - 1} \right)$$



$$\begin{aligned}
 &= \frac{1}{q-1} \sum_{r=0}^{100} {}^{101}C_{r+1} (q^{r+1} - 1) \\
 &= \frac{1}{q-1} [(1+q)^{101} - 1 - (2^{101} - 1)] \\
 &= \frac{(1+q)^{101} - 2^{101}}{q-1}
 \end{aligned}$$

$$\text{Now, } T_{100} = \frac{(q+1)^{101} - 2^{101}}{(q-1) \times 2^{100}}$$

- 18.** A bag contains 30 white balls and 10 red balls. 16 balls are drawn one by one randomly from the bag with replacement. If  $X$  be the number of white balls drawn; then  $\left( \frac{\text{mean of } X}{\text{Standard deviation of } X} \right)$  is equal to:

(A)  $3\sqrt{2}$                       (B) 4                      (C)  $\frac{4\sqrt{3}}{3}$                       (D)  $4\sqrt{3}$

**Sol. D**

$$P(\text{white ball}) = \frac{30}{40} = p$$

$$q = \frac{1}{4}, n = 16$$

$$\text{Mean} = np = 16 \times \frac{3}{4} = 12$$

$$\text{S.D.} = \sqrt{npq} = \sqrt{12 \times \frac{1}{4}} = \sqrt{3}$$

$$\Rightarrow \frac{\text{Mean}}{\text{S.D.}} = \frac{12}{\sqrt{3}} = 4\sqrt{3}$$

- 19.** Let  $\alpha$  and  $\beta$  be the roots of the quadratic equation  $x^2 \sin\theta - x(\sin\theta \cos\theta + 1) + \cos\theta = 0$  ( $0 < \theta < 45^\circ$ ), and  $\alpha < \beta$ . Then  $\sum_{n=0}^{\infty} \left( \alpha^n + \frac{(-1)^n}{\beta^n} \right)$  is equal to:

(A)  $\frac{1}{1-\cos\theta} - \frac{1}{1+\sin\theta}$                       (B)  $\frac{1}{1+\cos\theta} + \frac{1}{1-\sin\theta}$

(C)  $\frac{1}{1+\cos\theta} - \frac{1}{1-\sin\theta}$                       (D)  $\frac{1}{1-\cos\theta} + \frac{1}{1+\sin\theta}$

**Sol. D**

$$x^2 \sin\theta - x(\sin\theta \cos\theta + 1) + \cos\theta = 0$$

$$\sum_{n=0}^{\infty} \left( \alpha^n + \frac{(-1)^n}{\beta^n} \right) = ?$$

$$x = \frac{+(\sin\theta \cos\theta + 1) \pm \sqrt{\sin^2 \theta \cos^2 \theta + 2 \sin\theta \cos\theta + 1 - 4 \sin\theta \cos\theta}}{2 \sin\theta}$$

$$x = \frac{+(\sin \theta \cos \theta + 1) \pm |\sin \theta \cos \theta - 1|}{2 \sin \theta}$$

$$x = \frac{+(\sin \theta \cos \theta + 1) \mp (\sin \theta \cos \theta - 1)}{2 \sin \theta}$$

$$\frac{\sin \theta \cos \theta + 1 - \sin \theta \cos \theta + 1}{2 \sin \theta} = \frac{1}{\sin \theta}$$

and  $\frac{\sin \theta \cos \theta + 1 + \sin \theta \cos \theta - 1}{2 \sin \theta} = \cos \theta$

$$= \alpha = -\cos \theta, \quad \beta = -\frac{1}{\sin \theta}$$

$$\sum_{n=0}^{\infty} \left[ (+\cos \theta)^n + \frac{(-1)^n}{(+1/\sin \theta)^n} \right]$$

$$\sum_{n=0}^{\infty} \left( (+\cos \theta)^n + (-\sin \theta)^n \right)$$

$$\sum_{n=0}^{\infty} \left( (-\cos \theta)^0 + (-\cos \theta)^1 + (-\cos \theta)^2 + \dots \right) + [(\sin \theta)^0 + (\sin \theta)^1 + (\sin \theta)^2 + \dots]$$

$$\Rightarrow \left( \frac{1}{1 - \cos \theta} + \frac{1}{1 + \sin \theta} \right)$$

20. Let  $S = \{1, 2, \dots, 20\}$ . A subset  $B$  of  $S$  is said to be "nice", if the sum of the elements of  $B$  is 203. Then the probability that a randomly chosen subset of  $S$  is "nice" is:

- (A)  $\frac{4}{2^{20}}$                       (B)  $\frac{6}{2^{20}}$                       (C)  $\frac{5}{2^{20}}$                       (D)  $\frac{7}{2^{20}}$

Sol. C

$$S = \{1, 2, \dots, 20\}$$

sum of all elements (s) of 'S' = 210

$B \subset S$  & for "nice". sum of element(s) must be 203

$$\Rightarrow T (1, 6), (2, 5), (3, 4), (1, 2, 4)$$

$$\Rightarrow p = \frac{5}{2^{20}}$$

21. Let  $z$  be a complex number such that  $|z| + z = 3 + i$  (where  $i = \sqrt{-1}$ ). Then  $|z|$  is equal to:

- (A)  $\frac{5}{3}$                       (B)  $\frac{5}{4}$                       (C)  $\frac{\sqrt{41}}{4}$                       (D)  $\frac{\sqrt{34}}{3}$

Sol. A

$$|z| + z = 3 + i$$

$$\sqrt{x^2 + y^2} + x = 3, \quad y = 1$$

$$\sqrt{x^2 + 1} = 3 - x$$

$$x^2 + 1 = 9 + x^2 - 6x$$

$$6x = 8$$

$$x = \frac{4}{3}$$

$$\Rightarrow z = \frac{4}{3} + i$$

$$\Rightarrow |z| = \sqrt{\frac{16}{9} + 1} = \frac{5}{3}$$

22.  $\lim_{x \rightarrow 0} \frac{x \cot(4x)}{\sin^2 x \cot^2(2x)}$  is equal to:

- (A) 4 (B) 1 (C) 0 (D) 2

Sol. B

$$\lim_{x \rightarrow 0} \frac{x \cot 4x}{\sin^2 x \cdot \cot^2 2x}$$

$$\lim_{x \rightarrow 0} \frac{x}{\frac{\sin^2 x}{x^2} \times x^2} \times \frac{\tan^2 2x}{\frac{\tan 4x}{4x}} \times \frac{1}{4x^2} \times 4x^2$$

$$\Rightarrow \frac{4x^3}{4x^3} = 1$$

23. Given  $\frac{b+c}{11} = \frac{c+a}{12} = \frac{a+b}{13}$  for a  $\Delta ABC$  with usual notation. If  $\frac{\cos A}{\alpha} = \frac{\cos B}{\beta} = \frac{\cos C}{\gamma}$ , then the ordered triad  $(\alpha, \beta, \gamma)$  has a value :

- (A) (19, 7, 25) (B) (7, 19, 25) (C) (5, 12, 13) (D) (3, 4, 5)

Sol. B

$$\frac{b+c}{11} = \frac{c+a}{12} = \frac{a+b}{13}$$

$$\frac{\cos A}{\alpha} = \frac{c+a}{\beta} = \frac{\cos C}{\gamma}$$

$$\frac{b+c}{11} = \frac{c+a}{12} = \frac{a+b}{13} = \frac{2(a+b+c)}{36}$$

$$\frac{c}{5} = \frac{b}{6} = \frac{a}{7}$$

$$a = 7\lambda, b = 6\lambda, c = 5\lambda$$

$$\cos A = \frac{b^2 + c^2 - a^2}{2bc} = \frac{61 - 49}{60} = \frac{12}{60} = \frac{1}{5}$$

$$\cos B = \frac{74 - 36}{70} = \frac{19}{35}$$

$$\cos C = \frac{60}{84} = \frac{5}{7}$$

$$\alpha : \beta : \gamma = \frac{1}{5} : \frac{19}{35} : \frac{5}{7}$$

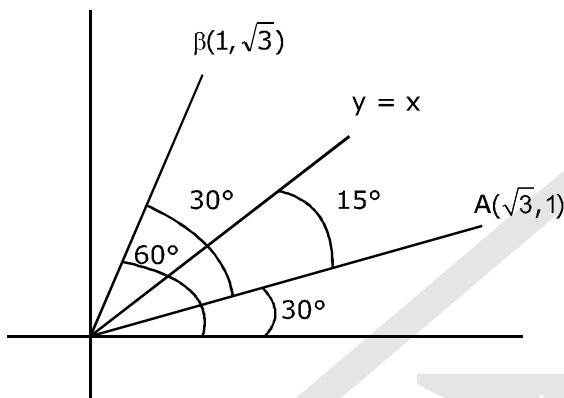
$$\Rightarrow 7 : 19 : 25$$

24. Let  $\sqrt{3}\hat{i} + \hat{j}$ ,  $\hat{i} + \sqrt{3}\hat{j}$  and  $\beta\hat{i} + (1-\beta)\hat{j}$  respectively be the position vectors of the points A, B and C with respect to the origin O. If the distance of C from the bisector of the acute angle between OA and OB is  $\frac{3}{\sqrt{2}}$  then the sum of all possible values of  $\beta$  is :

(A) 3 (B) 4 (C) 2 (D) 1

Sol.

D



Bisector is  $x - y = 0$

$C(\beta, 1 - \beta)$

$$\frac{|\beta + \beta - 1|}{\sqrt{2}} = \frac{3}{\sqrt{2}}$$

$$2\beta - 1 = 3 \text{ or } -3$$

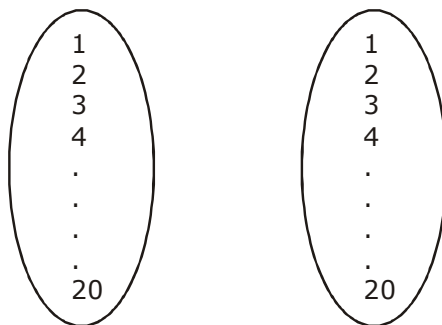
$$\beta = 2, -1$$

$$2 + (-1) = 1$$

25. The number of functions  $f$  from  $\{1, 2, 3, \dots, 20\}$  onto  $\{1, 2, 3, \dots, 20\}$  such that  $f(k)$  is a multiple of 3, whenever  $k$  is a multiple of 4, is :

(A)  $5^6 \times 15$  (B)  $6^5 \times (15)!$  (C)  $(15)! \times 6!$  (D)  $5! \times 6!$

Sol. C



for  $k = 4, 8, 12, 16, 20$

No. of ways =  $6!$

for remaining =  $15!$

$\Rightarrow 6! \times 15!$

26. If a hyperbola has length of its conjugate axis equal to 5 and the distance between its foci is 13, then the eccentricity of the hyperbola is :

(A) 2                      (B)  $\frac{13}{8}$                       (C)  $\frac{13}{12}$                       (D)  $\frac{13}{6}$

Sol. **C**

$$2b = 5, \quad 2ac = 13$$

$$b^2 = \frac{25}{4} = a^2(c^2 - 1)$$

$$\frac{25}{4} = \frac{169}{4c^2} (e^2 - 1)$$

$$25e^2 = 169e^2 - 169$$

$$\frac{169}{144} = e^2 \Rightarrow e = \frac{13}{12}$$

27. Let the length of the latus rectum of an ellipse with its major axis along x-axis and centre at the origin, be 8, If the distance between the foci of this ellipse is equal to the length of its minor axis, then which one of the following points lies on it?

(A)  $(4\sqrt{2}, 2\sqrt{3})$                       (B)  $(4\sqrt{3}, 2\sqrt{2})$                       (C)  $(4\sqrt{3}, 2\sqrt{3})$                       (D)  $(4\sqrt{2}, 2\sqrt{2})$

Sol. **B**

$$\frac{2b^2}{a} = 8 \Rightarrow b^2 = 4a$$

$$2ae = 2b$$

$$b = ae$$

$$b^2 = a^2 - a^2e^2$$

$$2a^2e^2 = a^2$$

$$\Rightarrow e^2 = \frac{1}{2}$$

$$e = \frac{1}{\sqrt{2}}$$

$$\Rightarrow b = \frac{a}{\sqrt{2}} \quad \& \quad \frac{a^2}{2} = 4a$$

$$a = 8, \quad b = 4\sqrt{2}$$

Now equation

$$\frac{x^2}{64} + \frac{y^2}{32} = 1$$

28. Two lines  $\frac{x-3}{1} = \frac{y+1}{3} = \frac{z-6}{-1}$  and  $\frac{x+5}{7} = \frac{y-2}{-6} = \frac{z-3}{4}$  intersect at the point R. The reflection of R in the xy-plane has coordinates:

(A)  $(2, -4, -7)$                       (B)  $(2, -4, 7)$                       (C)  $(-2, 4, 7)$                       (D)  $(2, 4, 7)$

Sol. **A**

$$\frac{x-3}{1} = \frac{y+1}{3} = \frac{3-6}{-1}$$

$$\& \frac{x+5}{7} = -\frac{y-2}{6} = \frac{3-3}{4}$$

$$\begin{aligned} x &= 3 + \lambda & x &= 7\mu - 5 \\ y &= 3\lambda - 1 & y &= -6\mu + 2 \\ z &= 6 - \lambda & z &= 4\mu + 3 \end{aligned}$$

$$\begin{aligned} 6 - 7\mu &= -8 \\ \lambda + 4\mu &= 3 \end{aligned}$$

$$\begin{aligned} -11\mu &= -11 \\ \mu &= 1 \end{aligned}$$

$$R(2, -4, 7)$$

↓

Reflection is (2, -4, -7)

29. The integral  $\int_{\pi/6}^{\pi/4} \frac{dx}{\sin 2x(\tan^5 x + \cot^5 x)}$  equals :

(A)  $\frac{1}{10} \left( \frac{\pi}{4} - \tan^{-1} \left( \frac{1}{9\sqrt{3}} \right) \right)$

(B)  $\frac{1}{20} \tan^{-1} \left( \frac{1}{9\sqrt{3}} \right)$

(C)  $\frac{1}{5} \left( \frac{\pi}{4} - \tan^{-1} \left( \frac{1}{3\sqrt{3}} \right) \right)$

(D)  $\frac{\pi}{40}$

Sol. A

$$I = \int_{\pi/6}^{\pi/4} \frac{dx}{\sin 2x(\tan^5 x + \cot^5 x)}$$

$$I = \int_{\pi/6}^{\pi/4} \frac{dx}{\sin 2x(\tan^5 x + \cot^5 x)}$$

$$I = \int_{\pi/6}^{\pi/4} \frac{\tan^5 x \, dx}{\frac{2 \tan x}{1 + \tan^2 x} (\tan^{10} x + 1)}$$

$$I = \int_{\pi/6}^{\pi/4} \frac{\tan^4 x \sec^2 x \, dx}{2(\tan^{10} x + 1)}$$

Let  $\tan^5 x = t$

$$5 \tan^4 x \sec^2 x \, dx = dt$$

$$\tan^4 x \sec^2 x \, dx = \frac{dt}{5}$$

$$I = \frac{1}{10} \int_{\left(\frac{1}{\sqrt{3}}\right)^5}^1 \frac{dt}{t^2 + 1}$$

$$I = \frac{1}{10} \times \tan^{-1} t \Big|_{(1/\sqrt{3})^5}^1$$

$$= \frac{1}{10} \left( \frac{\pi}{4} - \tan^{-1} \left( \frac{1}{9\sqrt{3}} \right) \right)$$

30. Let  $x, y$  be positive real numbers and  $m, n$  positive integers. The maximum value of the expression

$$\frac{x^m y^n}{(1+x^{2m})(1+y^{2n})} \text{ is :}$$

(A)  $\frac{1}{2}$

(B) 1

(C)  $\frac{1}{4}$

(D)  $\frac{m+n}{6mn}$

Sol. C

$$\frac{1+x^{2m}}{2} \geq x^m$$

$$\frac{1+y^{2n}}{2} \geq y^n$$

$$\frac{x^m}{(1+x^{2m})} \times \frac{y^n}{(1+y^{2n})} \leq \frac{1}{4}$$

